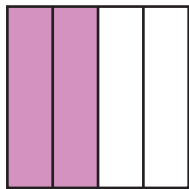


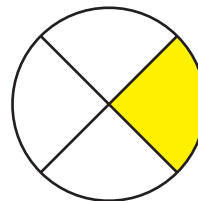
Identifying Fourths

A) Write what fraction of each shape is shaded.

1)



2)

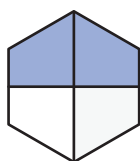


B) 1) Which of the following models does not represent the fraction $\frac{2}{4}$?

a)



b)



c)

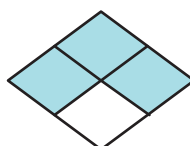


2) Which of the following models represents the fraction $\frac{3}{4}$?

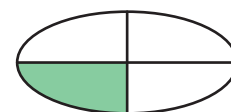
a)



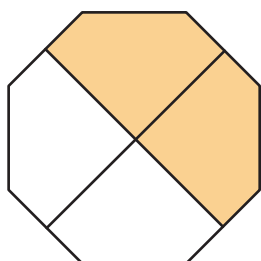
b)



c)



C) 1) What fraction of the octagon is shaded?



2) How many fourths make a whole?

3) What fraction of the octagon is left unshaded?