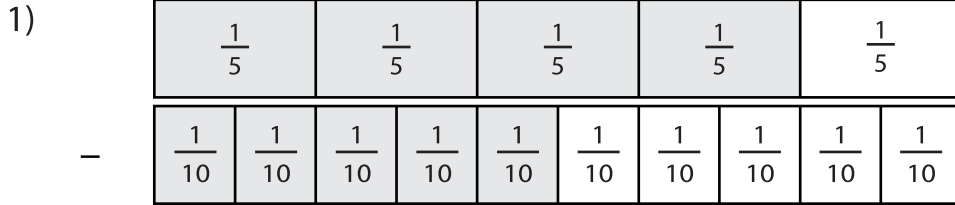
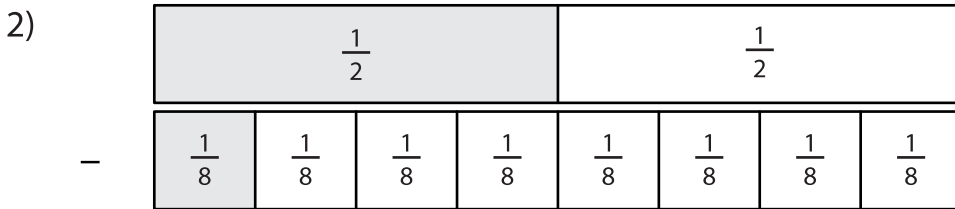


Subtracting Fractions Using Visual Models

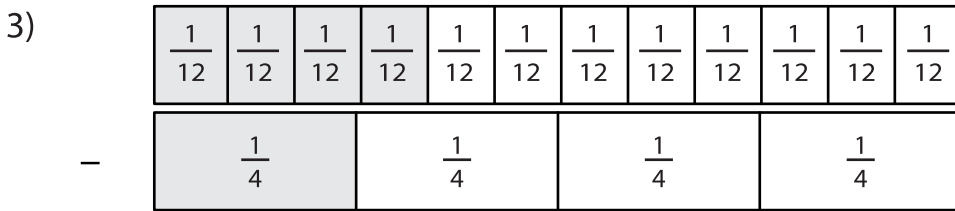
Observe the fraction models and complete the subtraction equations.



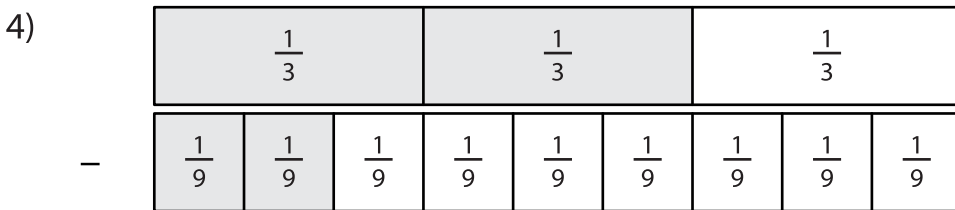
$$\frac{4}{5} - \frac{5}{10} = \boxed{}$$



$$\frac{1}{2} - \frac{1}{8} = \boxed{}$$



$$\frac{4}{12} - \frac{1}{4} = \boxed{}$$



$$\frac{2}{3} - \frac{2}{9} = \boxed{}$$



$$\frac{3}{4} - \frac{5}{8} = \boxed{}$$