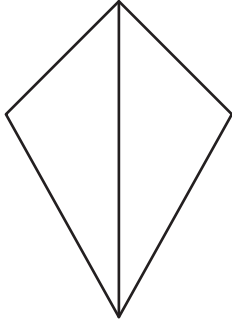


# Writing Halves, Thirds, and Fourths

---

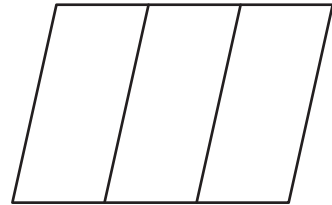
Write whether each of the following shapes is divided into halves, thirds, or fourths.

1)



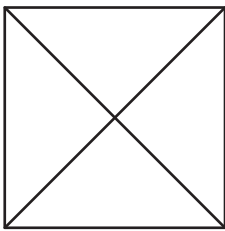
---

2)



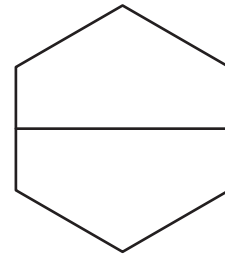
---

3)



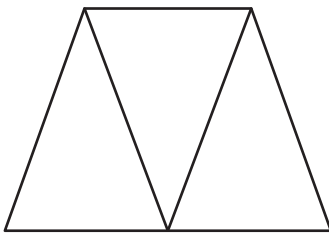
---

4)



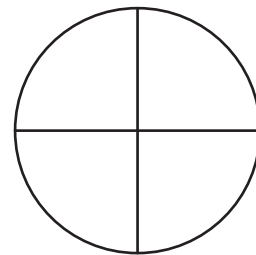
---

5)



---

6)



---