
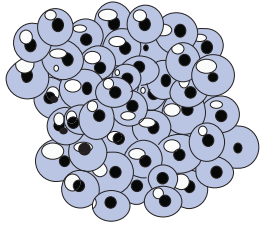


# Life Cycle of a Frog


Observe each picture, write which stage in the life cycle of a frog it represents, and shade the correct number.



# Preview

Become a member to unlock  
unrestricted access to both printable  
and online worksheets.

[www.tutoringhour.com](http://www.tutoringhour.com)



1

2

3

4

5

1

2

3

4

5