

# One-Step Inequalities

Solve each inequality, and graph the solution.

1)  $x - 1 < 9$



2)  $14 + x \leq 21$



3)

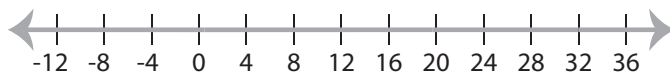
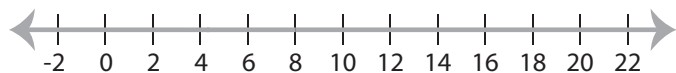
# Preview

Become a member to unlock  
unrestricted access to both printable  
and online worksheets.

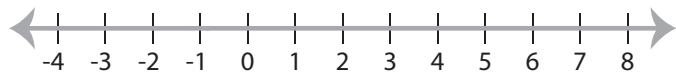


[www.tutoringhour.com](http://www.tutoringhour.com)

5)



7)  $6x \leq 6$



8)  $x - 8 \geq 12$

