

One-Step Inequalities

Solve each inequality, and graph the solution.

1) $x + 9 \geq 16$



2) $\frac{x}{9} < 1$



3)

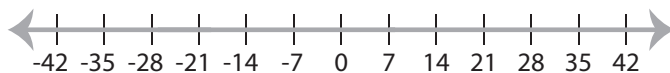
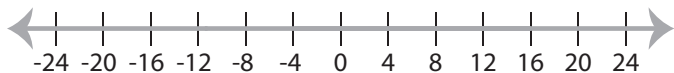
Preview

Become a member to unlock
unrestricted access to both printable
and online worksheets.

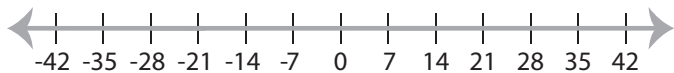


www.tutoringhour.com

5)



7) $\frac{x}{2} < 7$



8) $x + 4 \leq 6$

