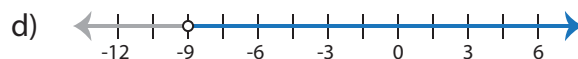
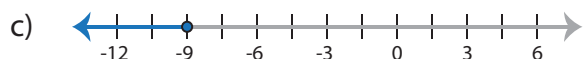
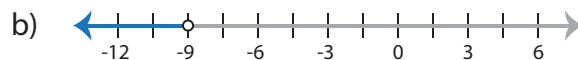


One-Step Inequalities

Choose the graph that represents the solution of each inequality.

1) $\frac{x}{9} \geq -1$



2) $7x$

a)

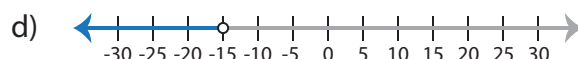
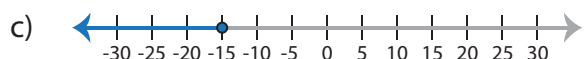
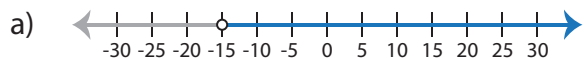
c)

3) x

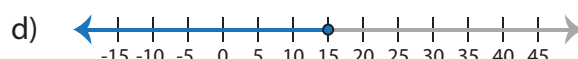
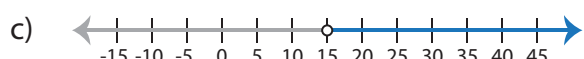
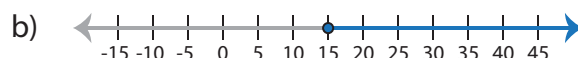
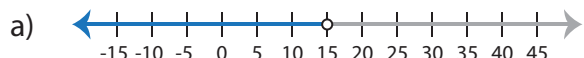
a)

c)

4) 25



5) $2x < 30$



Preview

Become a member to unlock
unrestricted access to both printable
and online worksheets.

www.tutoringhour.com

