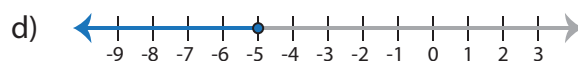
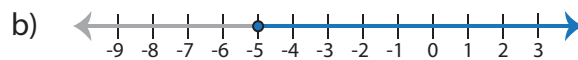
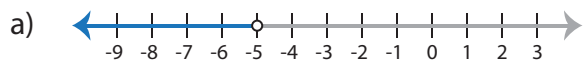


One-Step Inequalities

Choose the graph that represents the solution of each inequality.

1) $9x \leq -45$



2) x

a)

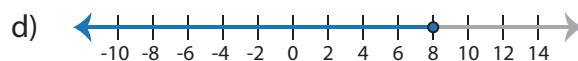
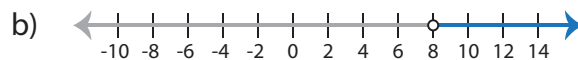
c)

3) x

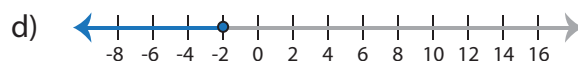
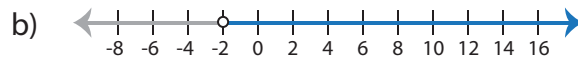
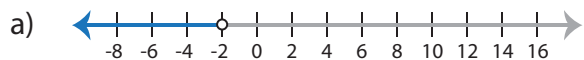
a)

c)

4) x



5) $x - 4 > -6$



Preview

Become a member to unlock
unrestricted access to both printable
and online worksheets.

www.tutoringhour.com

