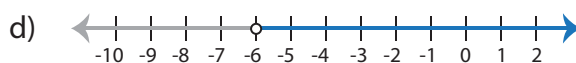
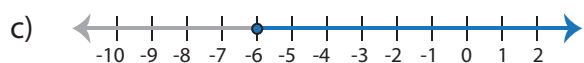
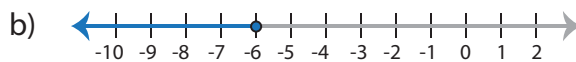
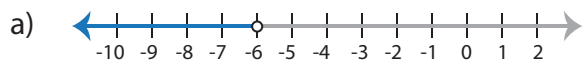


Two-Step Inequalities

Choose the graph that represents the solution of each inequality.

1) $4x + 29 \geq 5$



2) 49

a)

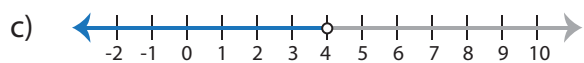
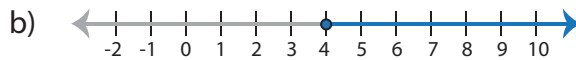
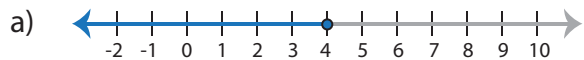
c)

3) x

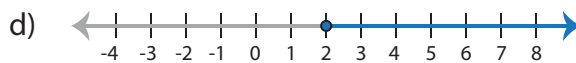
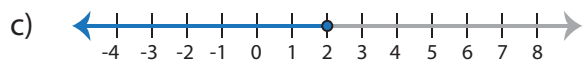
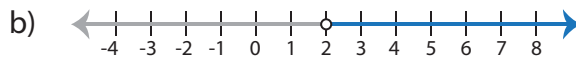
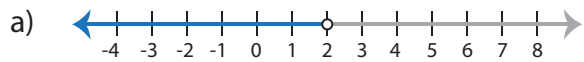
a)

c)

4) $9x$



5) $8x - 4 > 12$



Preview

Become a member to unlock
unrestricted access to both printable
and online worksheets.

www.tutoringhour.com

