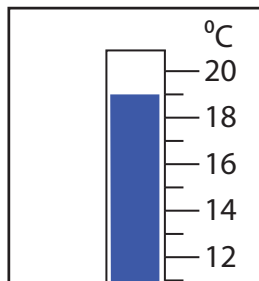


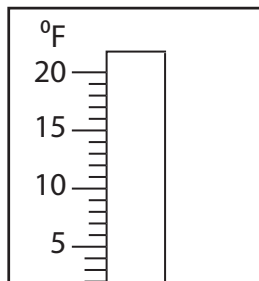
Rise and Fall in Temperatures

Find the new reading if the temperature

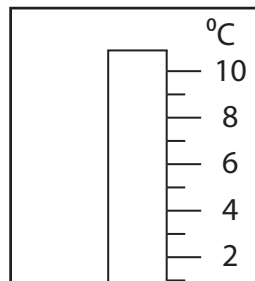
1) falls by 11°C .



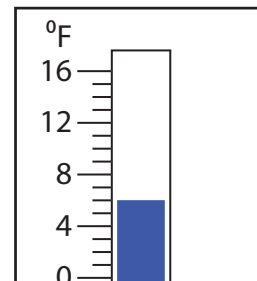
2) rises by 34°F .



3) rises by 9°C .



4) falls by 22°F .



Preview

Become a member to unlock
unrestricted access to both printable
and online worksheets.

www.tutoringhour.com

5) ri

