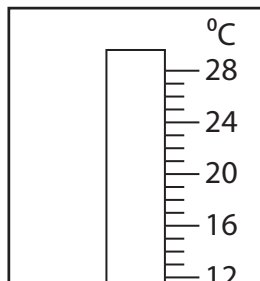


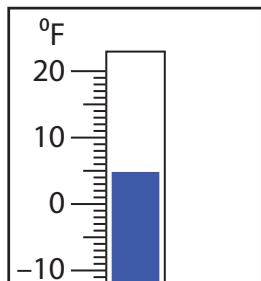
# Rise and Fall in Temperatures

Find the new reading if the temperature

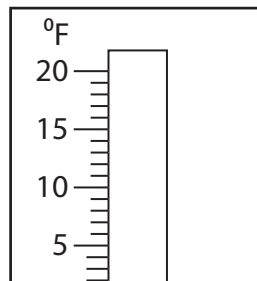
1) rises by  $4^{\circ}\text{C}$ .



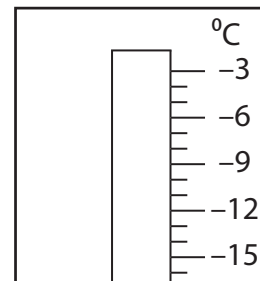
2) falls by  $35^{\circ}\text{F}$ .



3) falls by  $6^{\circ}\text{F}$ .



4) rises by  $13^{\circ}\text{C}$ .



## Preview

Become a member to unlock  
unrestricted access to both printable  
and online worksheets.

[www.tutoringhour.com](http://www.tutoringhour.com)

5) falls

