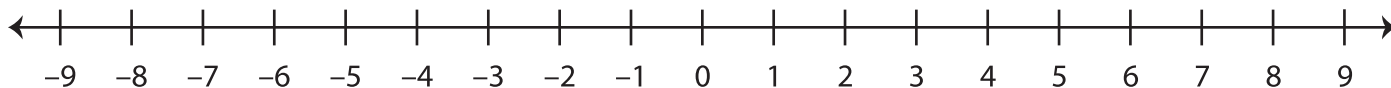


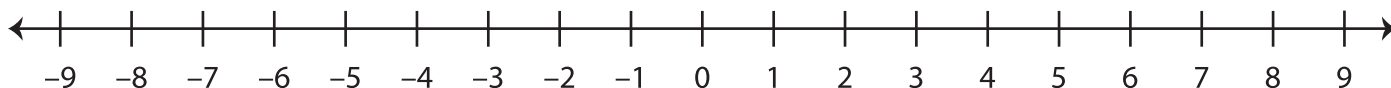
Number Line Addition

Use the number line and find the sum.

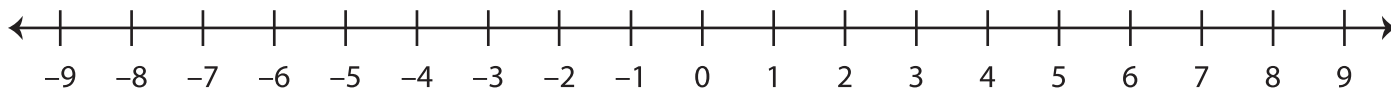
1) $7 + (-5) =$ _____



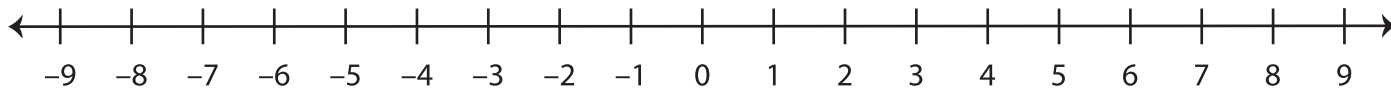
2) $-6 + 1 =$ _____



3) $-2 + (-4) =$ _____



4) $0 + 6 =$ _____



5) $5 + (-10) =$ _____

