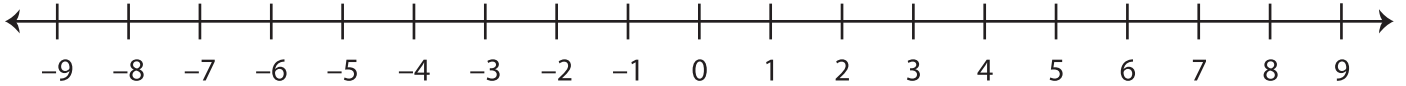


# Number Line Addition

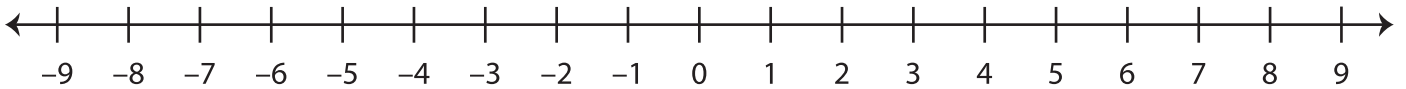
---

Use the number line and find the sum.

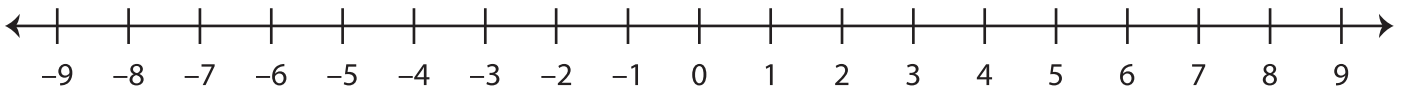
1)  $2 + 5 =$  \_\_\_\_\_



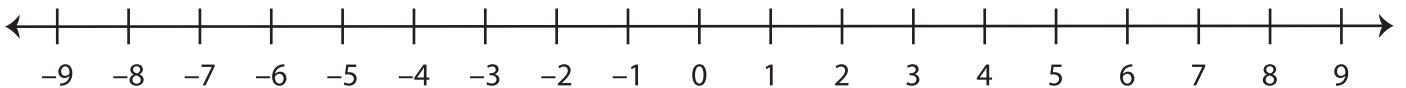
2)  $-8 + (-1) =$  \_\_\_\_\_



3)  $-6 + 3 =$  \_\_\_\_\_



4)  $4 + (-4) =$  \_\_\_\_\_



5)  $6 + 2 =$  \_\_\_\_\_

