



Comparing Integers

A) Circle the fish with the larger integer in each bowl.


1)



2)



3)



4)

Preview

Become a member to unlock
unrestricted access to both printable
and online worksheets.

B)


1)




www.tutoringhour.com



4)



5)



6)

