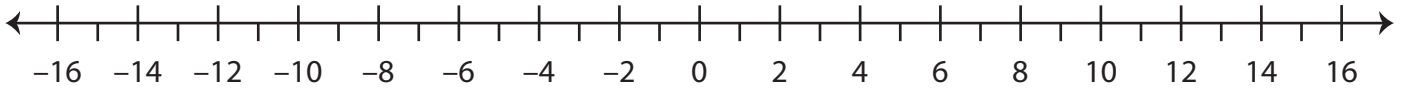


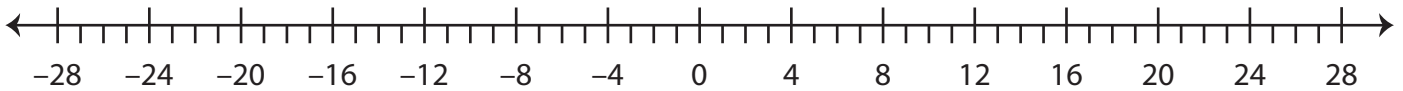
Integers on a Number Line

A) Locate the integers on the number line.

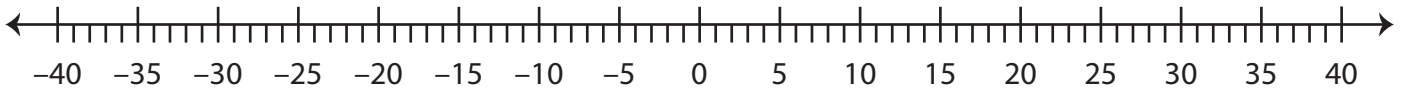
- 1) a) -9 b) 12 c) -2 d) -15



- 2) a) 18 b) 25 c) -13 d) 16



B) Observe the number line and answer the questions.



- 1) What integer is 24 units to the left of -6? _____
- 2) What integer is 1 unit to the right of -35? _____
- 3) What integer is 12 units to the left of 22? _____
- 4) What integer is 7 units to the right of -8? _____
- 5) What integer is 16 units to the left of 19? _____
- 6) What integer is 33 units to the left of 16? _____
- 7) What integer is 15 units to the right of -9? _____