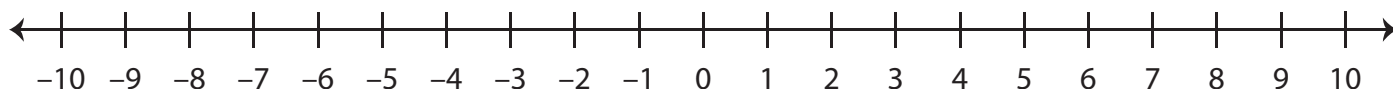


Ordering Integers on a Number Line

A) Plot the integers on the number line, and write them in increasing order.

1) 5, -9, 2, -4



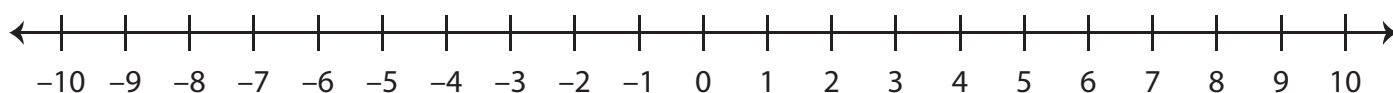
2) -7, 3, 0, -5

3) 6

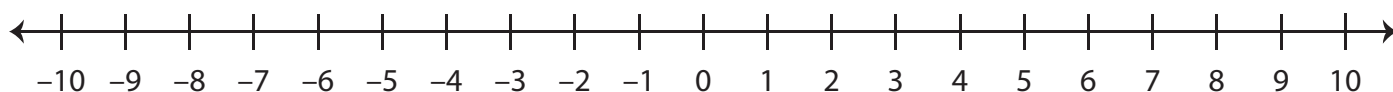
B) 1

1) 9

2) -5, 8, -4, 0



3) 10, -7, 1, -3



Preview

Become a member to unlock
unrestricted access to both printable
and online worksheets.



www.tutoringhour.com