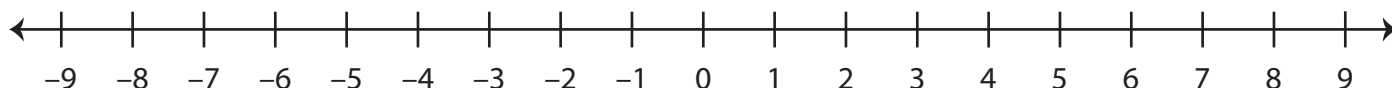


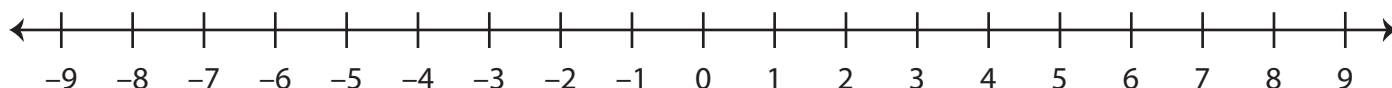
Number Line Subtraction

Find the difference using the number line.

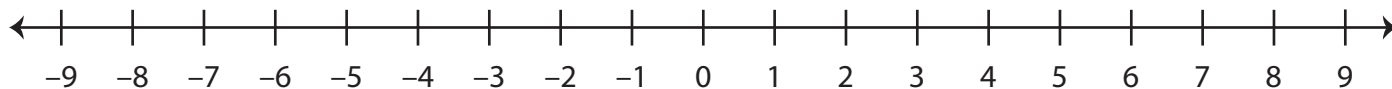
1) $7 - 3 =$ _____



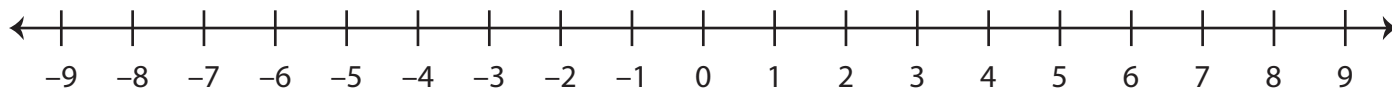
2) $-9 - (-9) =$ _____



3) $4 - 6 =$ _____



4) $-2 - 5 =$ _____



5) $1 - (-8) =$ _____

