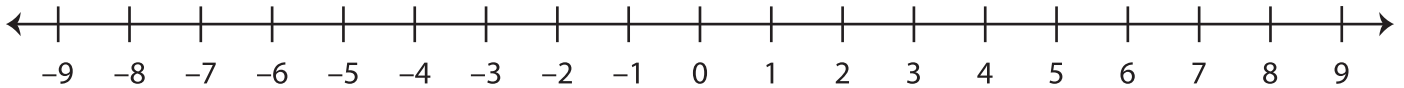


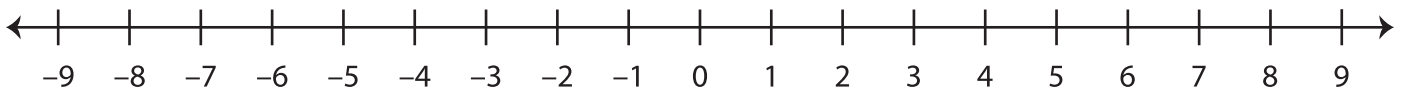
Number Line Subtraction

Use the number line and find the difference.

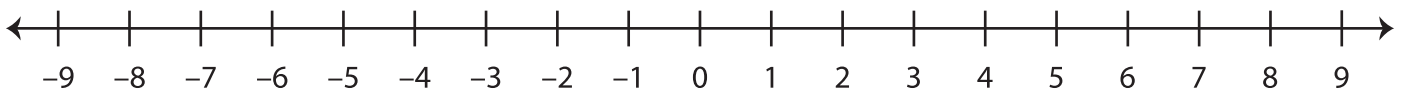
1) $-4 - (-10) =$ _____



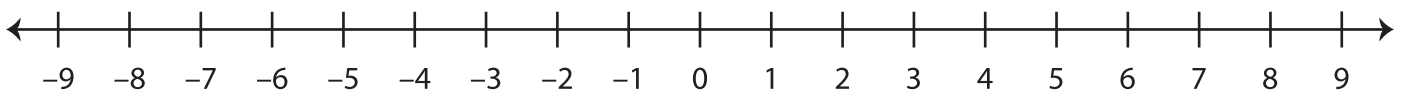
2) $-5 - 3 =$ _____



3) $6 - (-1) =$ _____



4) $-3 - (-7) =$ _____



5) $0 - 9 =$ _____

