


Landforms

Identify each landform and check the correct option.

1)



mountain

desert

2)



cave

plateau

3)

Preview

Become a member to unlock
unrestricted access to both printable
and online worksheets.

5)




island



cave

7)




hill

mountain

volcano

8)



mountain

valley

cliff