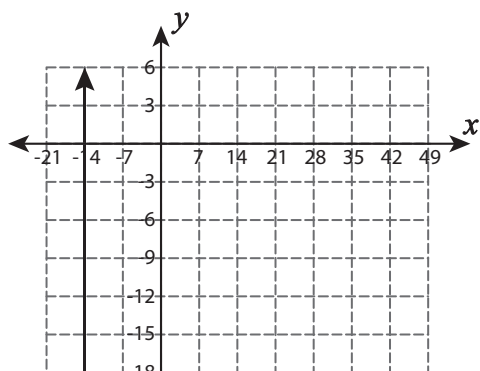


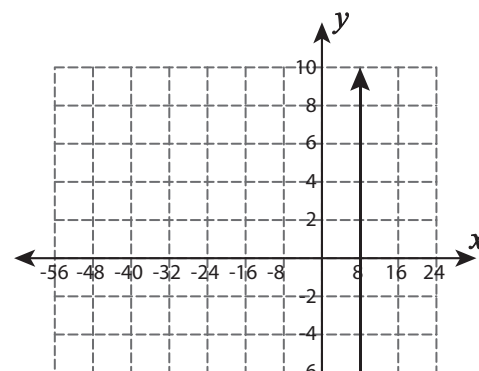
# Equations of Horizontal and Vertical Lines

Write the equation for each graph.

1)



2)



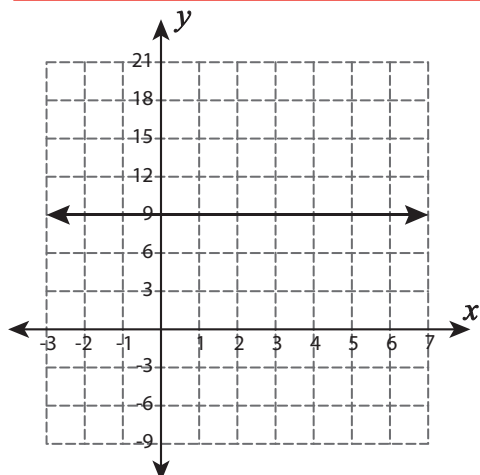
3)

**Become a member to unlock  
unrestricted access to both printable  
and online worksheets.**



[www.tutoringhour.com](http://www.tutoringhour.com)

5)



6)

