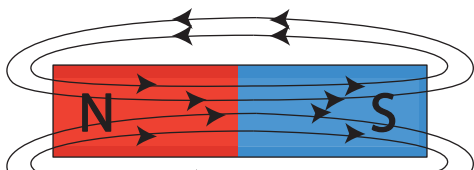


Magnetic Field

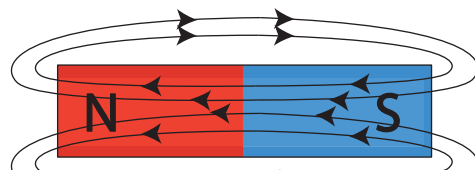
Check the correct option to answer each question about the magnetic field.

1) Which diagram illustrates the direction of the magnetic field lines?

a)



b)



Preview

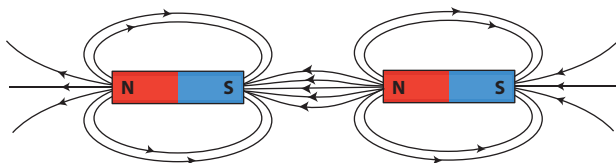
Become a member to unlock
unrestricted access to both printable
and online worksheets.

www.tutoringhour.com



4) Which of the following does not illustrate the property of a magnetic field?

a)



b)

