

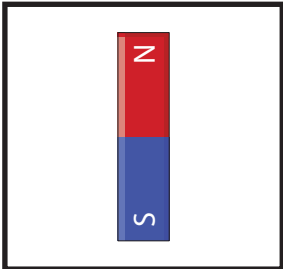
Shapes of Magnets

Match to identify the shape of each magnet.


1)



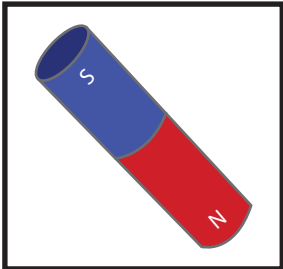
2)




3)



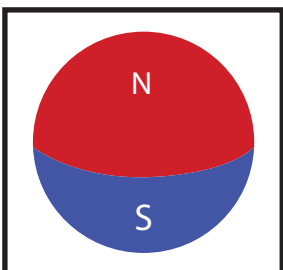
4)



5)



6)



sphere magnet

ring magnet

disc magnet

horseshoe magnet

bar magnet

cylindrical magnet