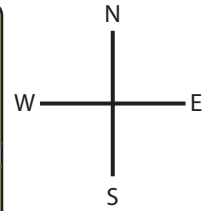



Map Skills

Read the map and answer the questions on where the four animals are in relation to the elephant.



Preview

Become a member to unlock
unrestricted access to both printable
and online worksheets.

1) W

a

2) W

a,



b,



c,




d,



3) Which animal is to the south of the elephant?

a)



b)



c)



d)



4) Which animal is to the west of the elephant?

a)



b)



c)



d)

