





# Map Skills

Observe the grid and use the key to answer the questions.

6						
5						
4						
3						
2						
1						

Key

 island

**Preview**

Become a member to unlock unrestricted access to both printable and online worksheets.

1) Name the two landforms that occupy block (A, 4).  
\_\_\_\_\_

2) Name the two landforms that occupy row 4.  
\_\_\_\_\_

3) Write the name of the landform in block (E, 3).  
\_\_\_\_\_

4) In which block is the volcano located?  
\_\_\_\_\_

5) Name the two landforms that occupy column C.  
\_\_\_\_\_

6) Which landform is located just to the left of block (E, 5)?  
\_\_\_\_\_

7) Name the two landforms that occupy column F.  
\_\_\_\_\_

8) In which block is the island located?  
\_\_\_\_\_

[www.tutoringhour.com](http://www.tutoringhour.com)