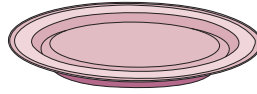



The Three States of Matter

Write whether each object is a solid, liquid, or gas.

1) Is a plate a solid, liquid, or gas?



2) Is juice an example of a solid, liquid, or gas?



3) |

4) |

5) |

6) |

7) |

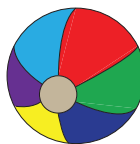
Preview

**Become a member to unlock
unrestricted access to both printable
and online worksheets.**




www.tutoringhour.com

8) Is the air inside a ball a solid, liquid, or gas?



9) Is the air that fills a tire an example of a solid, liquid, or a gas?



10) Is the water in a jug a solid, liquid, or gas?