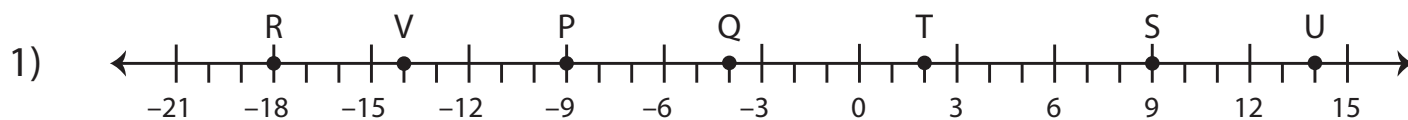


Finding the Midpoint



a) Midpoint of \overline{VQ} : _____

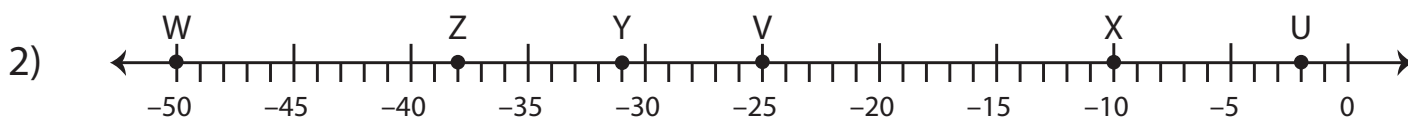
d) Midpoint of \overline{PS} : _____

b) Midpoint of \overline{TU} : _____

e) Midpoint of \overline{VT} : _____

c) Midpoint of \overline{QT} : _____

f) Midpoint of \overline{RU} : _____

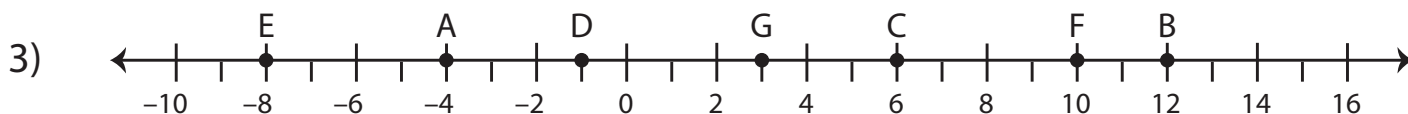


a) Midpoint of \overline{WZ} : _____

d) Midpoint of \overline{ZU} : _____

b) Midpoint of \overline{YV} : _____

c) Midpoint of \overline{XU} : _____



a) Midpoint of \overline{AB} : _____

d) Midpoint of \overline{CF} : _____

b) Midpoint of \overline{DG} : _____

e) Midpoint of \overline{EA} : _____

c) Midpoint of \overline{EC} : _____