

Adding Money


Add the prices of the items, and write the total amount.

1)



\$9.30

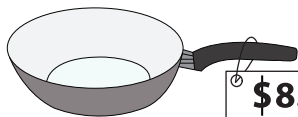
+



\$7.36


=

2)



\$8.67

+



\$2.52

=

3)



\$7.18

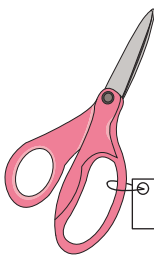
+



\$24.71

=

4)



\$3.85

+



\$6.53

=

5)



\$29.35

+



\$23.06

=
