







Comparing Money

Compare the prices of the products in store A and store B and determine which store sells each product at a lower price and check the appropriate box.

Store A	Store B
  	  

Preview

Become a member to unlock
unrestricted access to both printable
and online worksheets.

www.tutoringhour.com

3)		<input type="checkbox"/>	<input type="checkbox"/>	Store A	Store B
4)		<input type="checkbox"/>	<input type="checkbox"/>	Store A	Store B
5)		<input type="checkbox"/>	<input type="checkbox"/>	Store A	Store B