





Counting Dimes

Count the dimes in each set and write the total value in cents.

1)		_____ ¢
2)	<div style="border: 2px solid red; padding: 10px; text-align: center;"> <h2 style="color: blue;">Preview</h2> <p style="color: blue; font-weight: bold;">Become a member to unlock unrestricted access to both printable and online worksheets.</p> <p style="color: blue;">www.tutoringhour.com</p>  </div>	_____ ¢
3)		_____ ¢
4)		_____ ¢
5)		_____ ¢
6)		
7)		_____ ¢