





Fewest Coins

Write the minimum number of coins that make each given value.

1)

55¢ →  +  +  + 

2)

Preview




Become a member to unlock
unrestricted access to both printable
and online worksheets.

3)

4)

www.tutoringhour.com

5)

73¢ →  +  +  + 