






Counting Quarters

Count the quarters in each set and write the total value in dollars.

1) 	\$ _____
2) 	_____ _____ _____ _____ _____ _____
<div style="border: 2px solid red; padding: 10px;"> <h2 style="color: blue; font-size: 2em;">Preview</h2> <p style="color: blue; font-size: 1.2em;">Become a member to unlock unrestricted access to both printable and online worksheets.</p> <p style="color: blue; font-size: 1.2em;">www.tutoringhour.com</p>  </div>	
6) 	\$ _____
7) 	\$ _____