








# Combination of Coins

Show two different ways to make the given amounts.

1)

99¢

 _____	 _____	 _____	 _____
---	---	--	---

 _____	 _____	 _____	 _____
---	---	--	---

2)

# Preview

Become a member to unlock  
unrestricted access to both printable  
and online worksheets.







[www.tutoringhour.com](http://www.tutoringhour.com)





3)

 _____	 _____	 _____	 _____
---	---	--	---

4)

64¢

 _____	 _____	 _____	 _____
---	---	--	---

 _____	 _____	 _____	 _____
---	---	--	---