






Equivalent Money

Fill in the blank circles to make equivalent money.

1)   +   = 

2)     = 

3)     = 

4)     = 

5) A     is the money equivalent to?

- 6) Brandon bought a five-dollar toy truck and paid with dimes. How many dimes did he give the cashier?
