






Equivalent Money






Fill in the blank circles to make equivalent money.

1)   +   = 

2)   +   = 

3)   +   = 

4)   +   = 

5) C   +   = 
 could she get by exchanging the money?

- 6) How many five-dollar bills will Nathan get if he takes 5 one-dollar bills and 50 dimes to a community bank?