






Equivalent Money

Fill in the blank circles to make equivalent money.

1)   +   = 

2)   +   =  

3)   +   =  

4)   +   =  

5) Give her ten-dollar bills instead. How many ten-dollar bills did Mom give her?

6) Oliver has 3 one-dollar bills and 4 quarters. How many nickels is the money equivalent to?