





# Making Change

Calculate the change for each set of items you buy.

					
\$9.50	\$5.64	\$3.95	\$7.46	\$12.63	\$2.42

1)  +  +   \_\_\_\_\_

2)  +   \_\_\_\_\_

3)  +  +   \_\_\_\_\_

4)   \_\_\_\_\_

5)  +   \_\_\_\_\_