



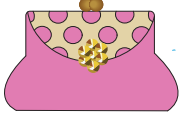





# Subtracting Money

Store 1 and Store 2 offer same products at different prices. Compare the price and figure out how much Anna saved or lost.

Store 1		Store 2	
 \$5.19	 \$10.01	 \$8.54	 \$4.98
 \$8.12	 \$9.50	 \$9.36	 \$9.96
 \$4.25		 \$6.70	

Item	Store	Amount Saved	Amount Lost
	1		
	2		
	2		
	1		
	2		