

Adding Money


Add the prices of the items, and write the total amount.

1)



\$9.30

+



\$7.36

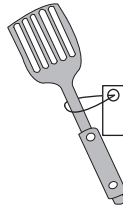
=

2)



\$8.67

+



\$2.52

=

3)



\$17.18

+



\$24.71


=

4)



\$3.85

+



\$6.53

=

- 5) Jillian bought two books. The books cost \$19.52 and \$14.75 respectively. How much did Jillian spend on the books in total?
