


Multiplication with Arrays

Complete the multiplication sentence that describes each array.

1)



2)




3)

**Become a member to unlock
unrestricted access to both printable
and online worksheets.**




www.tutoringhour.com

5)



$$4 \times \square = 12$$

6)



$$\square \times 2 = 8$$