



# Multiplication with Arrays

Complete the multiplication sentence that describes each array.

1)



2)



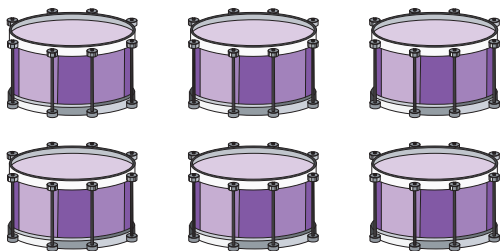
3)

**Preview**

**Become a member to unlock  
unrestricted access to both printable  
and online worksheets.**


[www.tutoringhour.com](http://www.tutoringhour.com)

5)



$$2 \times \square = 6$$

6)



$$\square \times 1 = 5$$