



# Multiplication with Arrays

Write the multiplication sentence that describes each array.

1)



2)



3)

## Preview

Become a member to unlock  
unrestricted access to both printable  
and online worksheets.




[www.tutoringhour.com](http://www.tutoringhour.com)

5)



$$\square \times \square = \square$$

6)



$$\square \times \square = \square$$