




Equal Groups

A)

1) How many trays are there? 2) 3) 4)

B)

Preview

Become a member to unlock
unrestricted access to both printable
and online worksheets.



www.tutoringhour.com

1) How many bowls are there? 2) How many strawberries are there in each bowl? 3) There are bowls with strawberries in each.4) Write a multiplication sentence to describe the model. \times =