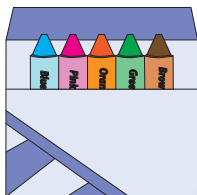
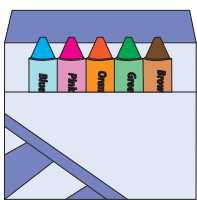


Equal Groups

Write a multiplication equation to describe each model.

1)



$$\square \times \square = \square$$

2)

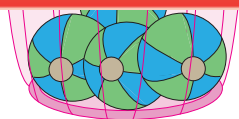
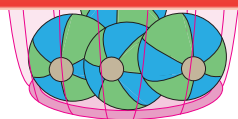
Preview

Become a member to unlock
unrestricted access to both printable
and online worksheets.

3)

4)

www.tutoringhour.com



$$\square \times \square = \square$$

5)



$$\square \times \square = \square$$