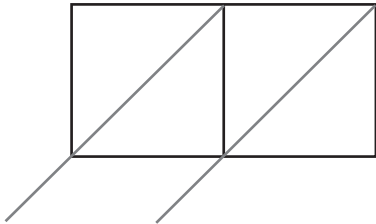


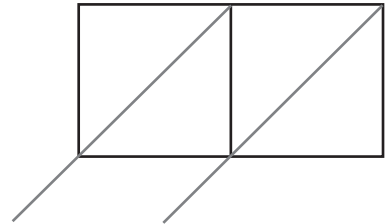
Lattice Multiplication

Find the product in each problem using the lattice multiplication method.

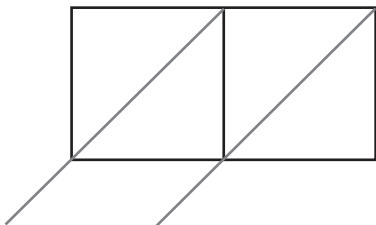
1) $60 \times 8 =$ _____



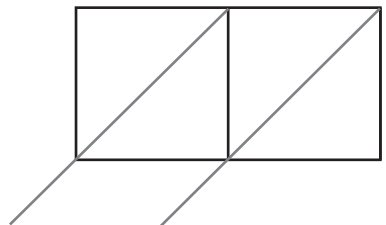
2) $89 \times 6 =$ _____



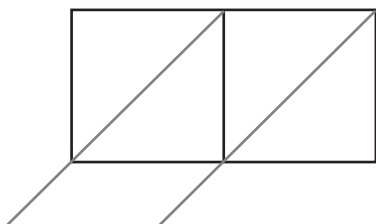
3) $74 \times 2 =$ _____



4) $18 \times 5 =$ _____



5) $91 \times 9 =$ _____



6) $56 \times 4 =$ _____

