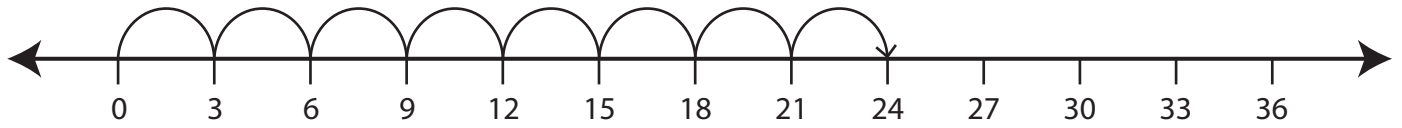


Multiplication Using Number Lines

A) Complete the multiplication sentence.



$$8 \times \square = 24$$

B) Choose the multiplication sentence that describes the model.

Preview

Become a member to unlock
unrestricted access to both printable
and online worksheets.

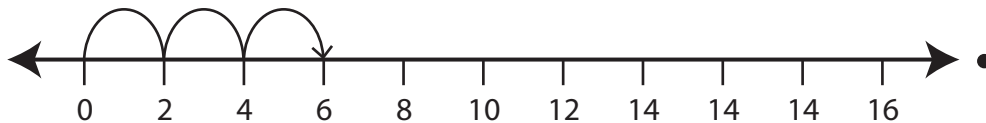


www.tutoringhour.com

C) I

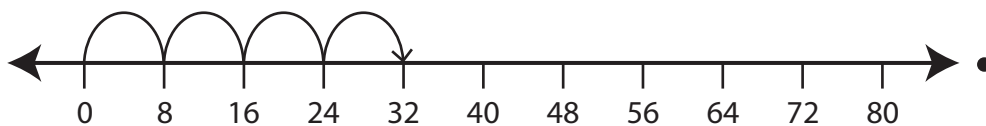
D) M

1)



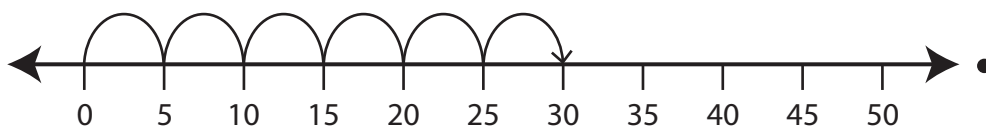
• $6 \times 5 = 30$

2)



• $3 \times 2 = 6$

3)



• $4 \times 8 = 32$