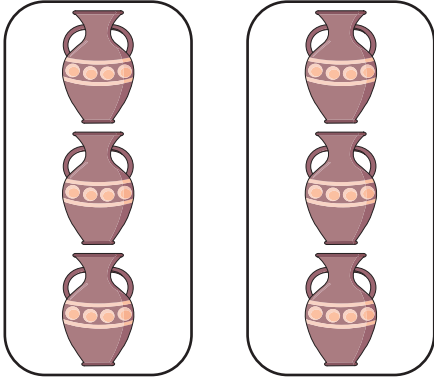


Multiplication as Repeated Addition

Complete the repeated addition and multiplication sentences.

1) Repeated Addition Sentence:

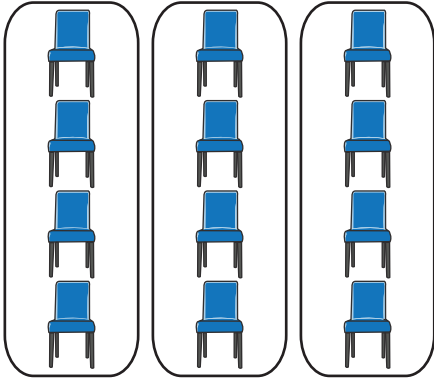


$$\square + \square = \square$$

Multiplication Sentence:

$$\square \times 3 = \square$$

2) Repeated Addition Sentence:




$$\square + \square + \square = \square$$

Multiplication Sentence:

$$\square \times 4 = \square$$

3) Repeated Addition Sentence:



$$\square + \square + \square + \square + \square = \square$$

Multiplication Sentence:

$$\square \times 3 = \square$$

4) Repeated Addition Sentence:



$$\square + \square + \square + \square = \square$$

Multiplication Sentence:

$$\square \times 2 = \square$$