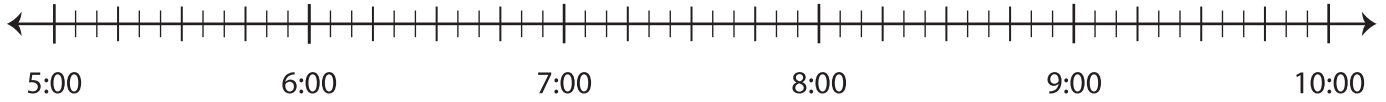


Number Lines | Elapsed Time

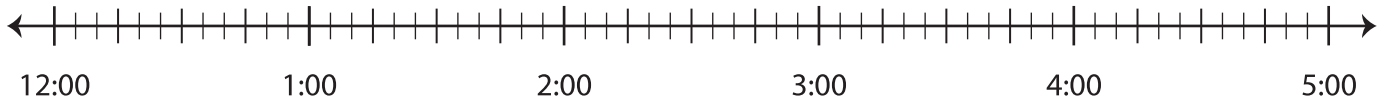
Draw the number lines and find the elapsed time.

- 1) **Start time:** 6:40 a.m. **End time:** 8:00 a.m.



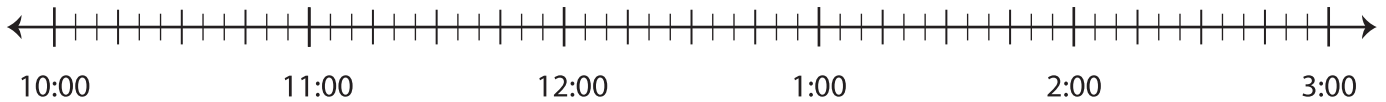
Elapsed time: _____

- 2) **Start time:** 1:15 p.m. **End time:** 4:10 p.m.



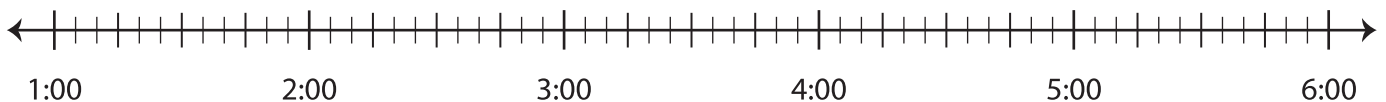
Elapsed time: _____

- 3) **Start time:** 11:25 a.m. **End time:** 12:15 p.m.



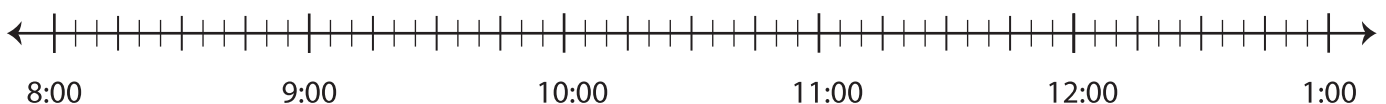
Elapsed time: _____

- 4) **Start time:** 2:00 a.m. **End time:** 5:25 a.m.



Elapsed time: _____

- 5) **Start time:** 9:50 p.m. **End time:** 11:35 p.m.



Elapsed time: _____