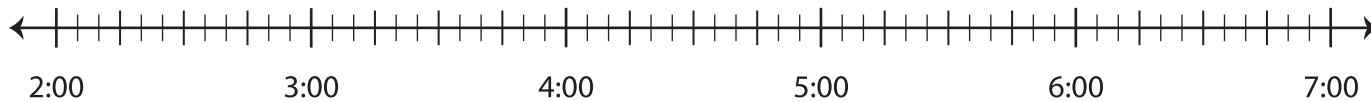


# Number Lines | Elapsed Time

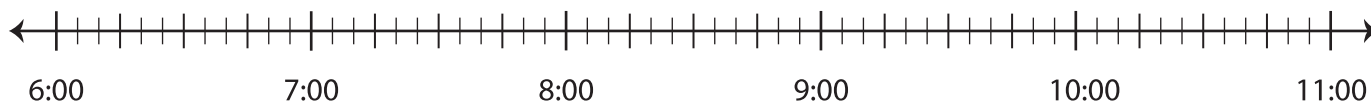
Draw the number lines and find the elapsed time.

- 1) **Start time:** 3:05 p.m. **End time:** 6:45 p.m.



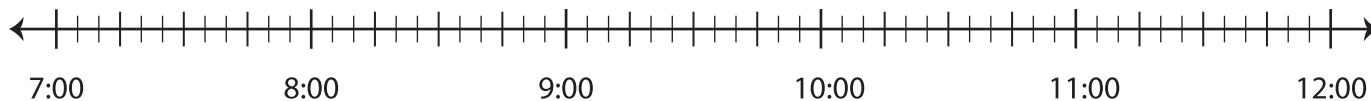
**Elapsed time:** \_\_\_\_\_

- 2) **Start time:** 7:30 a.m. **End time:** 10:00 a.m.



**Elapsed time:** \_\_\_\_\_

- 3) **Start time:** 8:10 p.m. **End time:** 9:35 p.m.



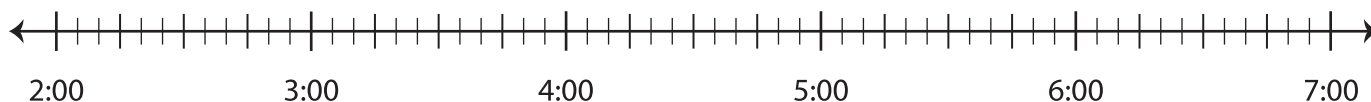
**Elapsed time:** \_\_\_\_\_

- 4) **Start time:** 10:20 p.m. **End time:** 12:30 a.m.



**Elapsed time:** \_\_\_\_\_

- 5) **Start time:** 2:50 a.m. **End time:** 6:55 a.m.



**Elapsed time:** \_\_\_\_\_