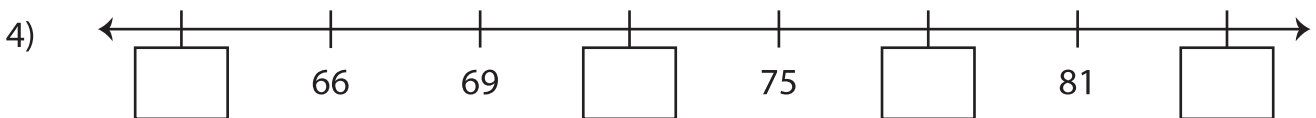
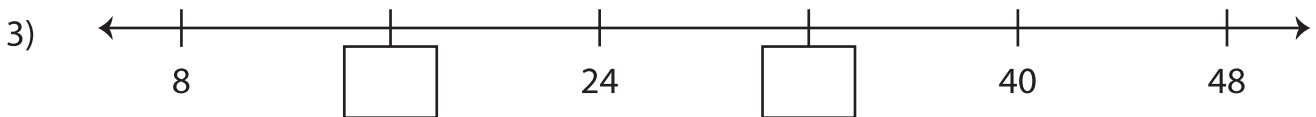
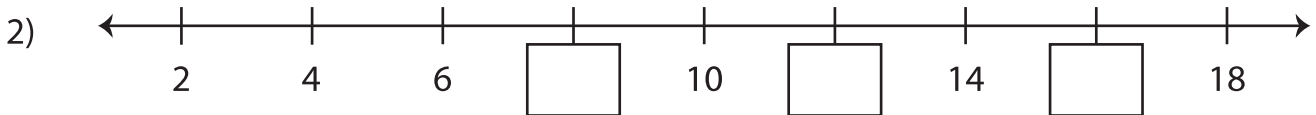
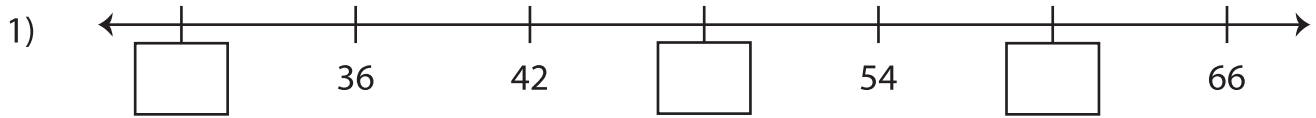
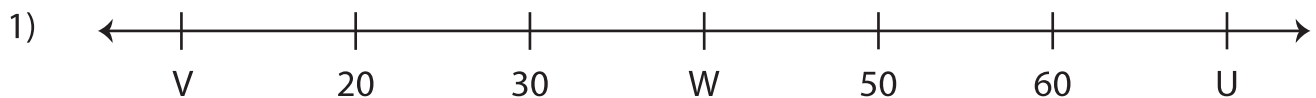


Number Lines

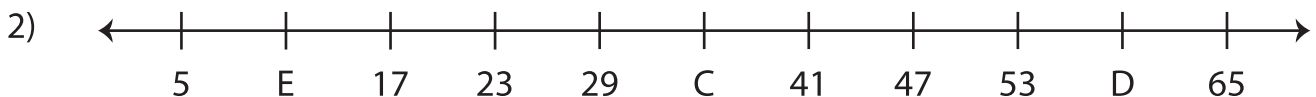
A) Fill in the missing numbers on each number line.



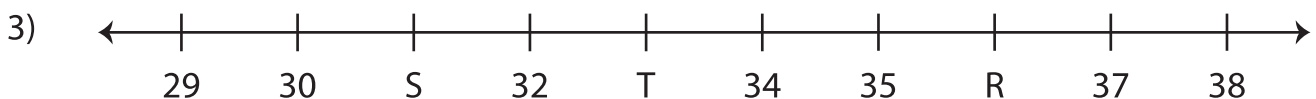
B) What numbers do the letters on each number line represent?



$$U = \underline{\hspace{2cm}}; \quad V = \underline{\hspace{2cm}}; \quad W = \underline{\hspace{2cm}}$$



$$C = \underline{\hspace{2cm}}; \quad D = \underline{\hspace{2cm}}; \quad E = \underline{\hspace{2cm}}$$



$$R = \underline{\hspace{2cm}}; \quad S = \underline{\hspace{2cm}}; \quad T = \underline{\hspace{2cm}}$$