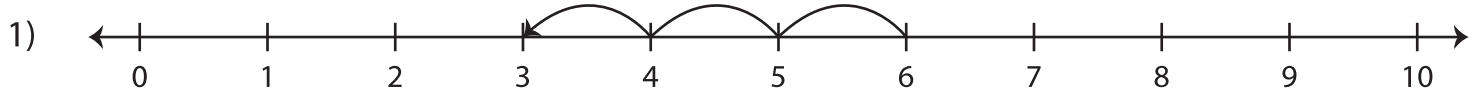
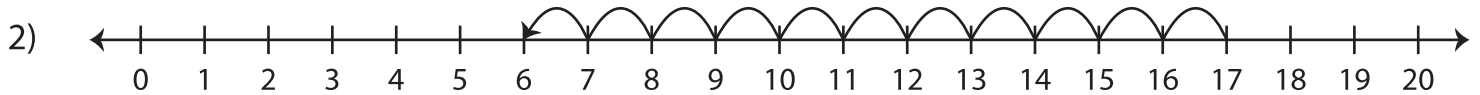


Number Lines | Subtraction

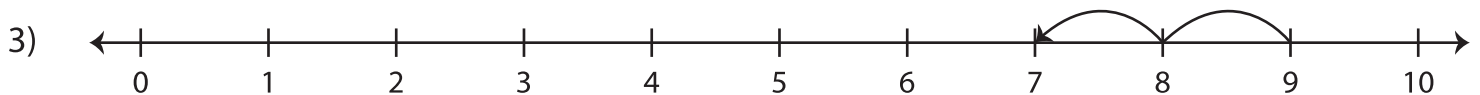
A) Read each number line and find the difference.



$$6 - 3 = \underline{\quad}$$



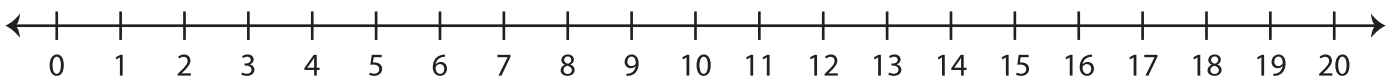
$$17 - 11 = \underline{\quad}$$



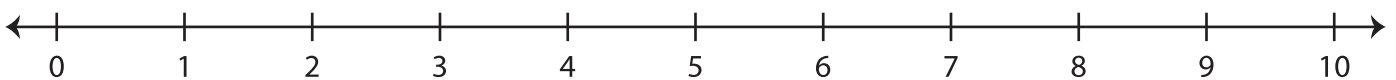
$$9 - 2 = \underline{\quad}$$

B) Indicate hops on each number line and complete the subtraction equation.

1) $13 - 8 = \underline{\quad}$



2) $8 - 7 = \underline{\quad}$



3) $18 - 14 = \underline{\quad}$

